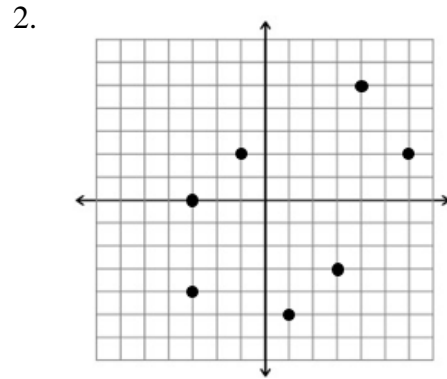
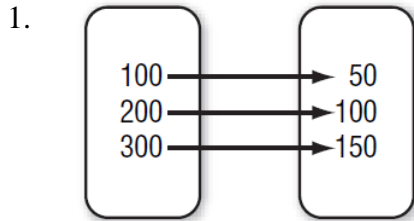


Domain and Range

Name: _____

Period: _____

Directions: State the domain and range for each number relationship.



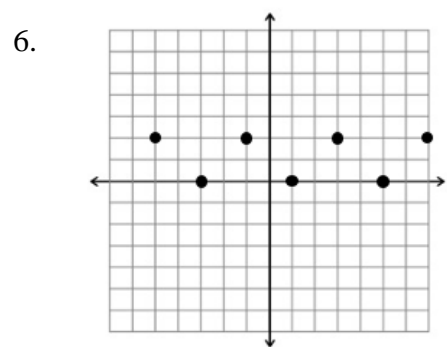
3.

Daily CD Sales	
Day	CDs Sold
Mon	287
Tue	395
Wed	128
Thu	326
Fri	649

4. $(8, -2), (4, 3), (-6, 0), (0, -6), (-3, 1), (2, 9)$

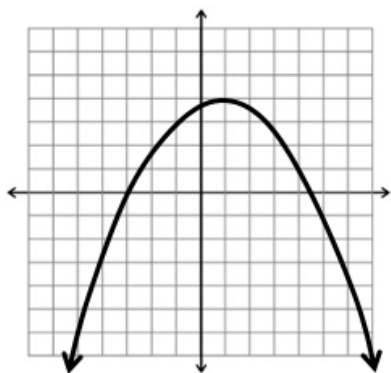
5.

Basketball Scoring Record	
Game	Points Scored
1	37
2	44
3	38
4	59

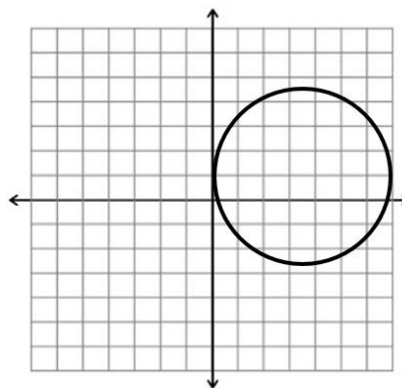


Directions: For each graph, state the domain and range in set notation and interval notation.

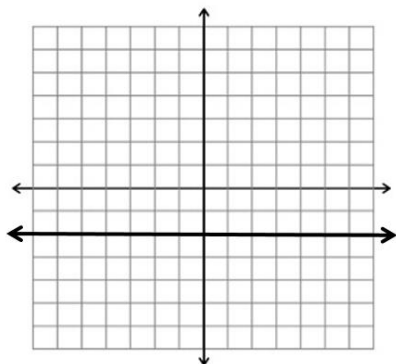
7.



8.



9.



10.

